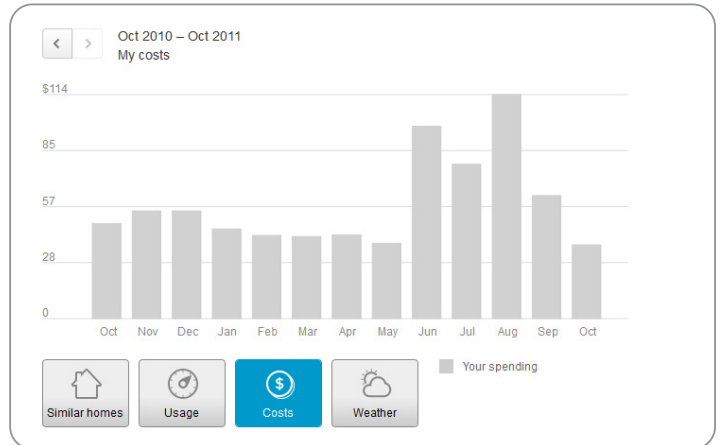
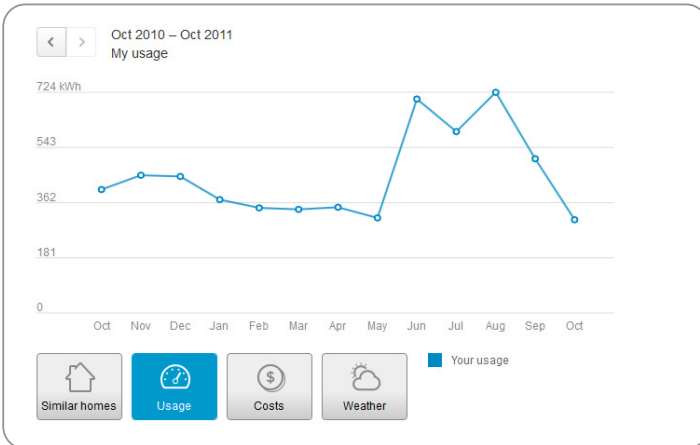


Analyzing the Cost of Using Electricity

Graph Data

Use the graphs below to answer the questions that follow.



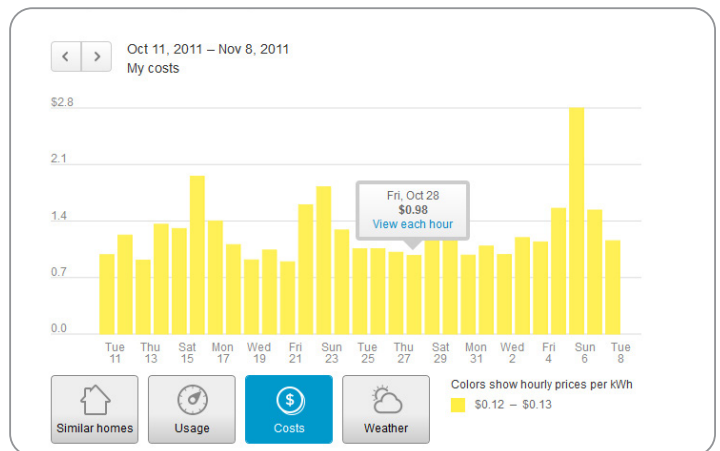
Questions

Look at the graphs for the past 12 months. In which month did this family use the most kWhs of electricity?

Month: _____ kWh Utility bill amount \$ _____

Give two probable reasons why this family used more energy during this month.

- 1.
- 2.



Questions

During this billing cycle, on which day did the family consume the most kWhs of electricity?

Day of the week: _____ Date: _____ kWh

How much did they pay for electricity on this day? \$ _____